


Farming in Shawnee

How fast can you go when driving in Shawnee? How long would it take you to drive 24 miles?

_____ + _____ = _____



What makes the stove hot in the farmhouse?

Draw your favorite chicken(s)



Draw where the chickens live.



Besides toilet paper, what two things could people use at the outhouse?

Farming in Shawnee




How you dry your clothes after wash day?

Name three plants you find on our farm.

1. _____ 2. _____


3. _____



How many bushels would $8 \frac{1}{2}$ pecks be?

1 bushel = 4 pecks

How many cows can live in the barn?



Draw the car would you use to take the crops to the market.